

**INSTRUCTIONS: (On where to do the assignments subject-wise):**

1. *For English Assignment: Use ruled sheets only.*
2. *For Hindi/Punjabi Assignments: Use 2-line sheets only.*
3. *For Maths: Use square sheets only.*
4. *Mention the student's name, class, section, roll no., and subject name on every subject.*

**SUBJECT – PUNJABI**

1. ਅੰਬ ਦੀ ਤਸਵੀਰ ਬਣਾ ਕੇ ਉਸਦੇ ਫਾਇਦੇ ਲਿਖੋ।
2. ਵਚਨ ਬਦਲੋ- ਧੀ, ਭੇਡ, ਅੱਖ, ਕੁੜੀ, ਕਾਪੀ
3. ਜਸਪ੍ਰੀਤ ਦੇ ਪਾਪਾ ਨੇ ਐਤਵਾਰ ਨੂੰ ਉਸ ਨੂੰ ਕਿੱਥੇ ਭੇਜਿਆ?
4. ਗੁਰੂ ਅੰਗਦ ਦੇਵ ਜੀ ਸਿੱਖਾਂ ਦੇ ਕਿੰਨੇ ਗੁਰੂ ਸਨ?
5. ਗੁਰੂ ਅੰਗਦ ਦੇਵ ਜੀ ਦਾ ਵਿਆਹ ਕਿੰਨੀ ਉਮਰ ਵਿੱਚ ਹੋਇਆ?
6. 'ਸ਼ਬਦ -ਅਰਥ - ਚਾਬੀ, ਸਮਝ, ਸਬੂਤ, ਪ੍ਰਮਾਣ, ਪ੍ਰਤਿਭਾ
7. ਗੁਰਮੁਖੀ ਲਿਪੀ ਦੀ ਸਿਰਜਣਾ ਕਿਸ ਨੇ ਕੀਤੀ?
8. ਗੁਰਮੁਖੀ ਤੋਂ ਕੀ ਭਾਵ ਹੈ?
9. ਤੁਹਾਡੀ ਮਾਂ ਬੋਲੀ ਕਿਹੜੀ ਹੈ?
10. ਪੰਜਾਬੀ ਵਿੱਚ ਕਿੰਨੀਆਂ ਲਗਾਂ ਮਾਤਰਾਵਾਂ ਹੁੰਦੀਆਂ ਹਨ?
11. ਸ੍ਰੀ ਗੁਰੂ ਅੰਗਦ ਦੇਵ ਜੀ ਦਾ ਮੁੱਢਲਾ ਨਾਮ ਕੀ ਸੀ?
12. ਪੰਜਾਬੀ ਭਾਸ਼ਾ ਵਿੱਚ ਕਿੰਨੇ ਲਗਾਖਰ ਹੁੰਦੇ ਹਨ?
13. ਭਾਸ਼ਾ ਤੋਂ ਕੀ ਭਾਵ ਹੈ?
14. ਮਾਂ ਬੋਲੀ ਕੀ ਹੁੰਦੀ ਹੈ?
15. ਲਿਖਤੀ ਭਾਸ਼ਾ ਕਿਸ ਨੂੰ ਆਖਦੇ ਹਨ?
16. ਫਲਾਂ ਦਾ ਰਾਜਾ ਕਿਸ ਨੂੰ ਕਿਹਾ ਗਿਆ ਹੈ?
17. ਕਿਹੜੇ ਫਲ ਵਿੱਚ ਵਿਟਾਮਿਨ 'ਸੀ' ਦੀ ਮਾਤਰਾ ਜ਼ਿਆਦਾ ਹੁੰਦੀ ਹੈ?
18. ਲਿੰਗ ਬਦਲੋ- ਸ਼ੇਰ, ਹੀਰਾਂ, ਚੂਹਾ, ਕਬੂਤਰ, ਭਤੀਜਾ
19. ਤੁਹਾਡੇ ਮਾਤਾ ਅਤੇ ਪਿਤਾ ਜੀ ਦਾ ਕੀ ਨਾਂ ਹੈ?
20. ਤੁਹਾਡੀ ਮਨਪਸੰਦ ਅਧਿਆਪਕਾ ਕੌਣ ਹੈ?

Subject Enrichment Activity

Topic 1: ਕੋਈ ਪੰਜ ਫੁੱਲਾਂ ਦੀਆਂ ਤਸਵੀਰਾਂ ਬਣਾ ਕੇ ਉਹਨਾਂ ਦੇ ਫਾਇਦੇ (ਲਾਭ) ਲਿਖੋ ( For EVEN Roll No.)

Topic 2 : 10 ਵਚਨ ਬਦਲੋ ਲਿਖੋ ਅਤੇ ਤਸਵੀਰਾਂ ਵੀ ਬਣਾਓ। ( For ODD Roll No.)

## **SUBJECT – EVS**

1. What do family members do together?
2. Who is the oldest and youngest member of your family?
3. Name two types of family.
4. Write the names of some games you play with your family members/friends. Which of these games do you like the most?
5. What is Mela?
6. Name some things you find in a mela.
7. Write down some of the food items found in a mela.
8. Which transport do you use while going to school?
9. Name some transport which you see in your locality.
10. Write about Vishu Kani.
11. Write any five festivals celebrated in our country.
12. Name some harvest festivals.
13. Which flower festival is celebrated in Kashmir?
14. Write and draw parts of plants.
15. Name the places where Kumbh Mela is held.
16. Define Trees.
17. Define Herbs with example.
18. What is the purpose behind celebrations of festivals?
19. What do you mean by festivals?
20. How do you celebrate festivals?

### **SUBJECT ENRICHMENT ACTIVITY**

1. Draw a vibrant scene of a Mela (Fair) on a Half Chart Paper which gives you plenty of space on big details.
  - (a) Sketch large structure like a Giant Wheel in the background, food and toy stalls in the middle and families or balloon sellers in the front.
  - (b) Outline everything with a black sketch pen and use bright, energetic colours to make you lively festival scene pop. (For ODD Roll No.)
2. Draw or paste the picture of any four Indian Festivals and write about them (Two Lines Each) on A4 Sheet (For EVEN Roll No.)

**Reader (पाठ्य पुस्तक)**

1. दवाइयाँ किससे बनती हैं?
2. क्या पेड़ वर्षा लाने में सहायक होते हैं?
3. माँ ने राजू की आँखें किससे धोई?
4. क्या हमें पानी का उपयोग सोच-समझ कर करना चाहिए?
5. राजू की आँखों में क्या हो रहा था?
6. सारा जगत किससे सजा हुआ है?
7. यदि धरती पर पानी खत्म हो गया तो कौन जीवित नहीं रह पाएगा?
8. डॉक्टर ने एक्सरसाइज कितनी बार करने के लिए कहा?
9. **निम्नलिखित शब्दों के अर्थ लिखें:** राही , नियामत , अनमोल , सीमित, लापरवाही
10. राजू की आँखों की परेशानी का क्या कारण था?

**व्याकरण भाग**

11. भाषा किसे कहते हैं?
12. सहज हिंदी व्याकरण पुस्तक में संख्या 18, 19, 24, 25, 28, 29, 30 तक पूरा करो।
13. अपने बड़े भाई की शादी के लिए स्कूल के प्रधानाचार्य जी से चार दिन की छुट्टी लेने हेतु प्रार्थना पत्र लिखो।
14. “अमृतसर साहिब” की यात्रा पर अनुच्छेद लिखो।
15. सहज हिंदी व्याकरण पुस्तिका पेज नंबर 57 पर दी गई कहानी “प्यासा” को अपने शब्दों में लिखो।
16. लिंग बदलो दादा , नाना, मुर्गा , तोता , घोडा ,
17. वचन बदलो पौधा , तितली , घोडा , बच्चा, पंखा
18. संज्ञा किसे कहते है परिभाषा लिखो
19. बीमारी की छुट्टी के लिए प्रार्थना पत्र लिखो
20. “चिड़िया घर की सैर” अनुच्छेद लिखो

**SUBJECT ENRICHMENT ACTIVITY**

1. 1 से 15 तक अंग्रेजी अंक और हिंदी शब्दों में गिनती लिखकर उसके सामने उनके ही चित्र बनाएं या चिपकाए। (For ODD Roll No.)
2. पाठ 11 पृष्ठ संख्या 43 पर दिए गए चित्र के अनुसार यहां क्या-क्या काम हो रहा है उसके बारे में लिखिए। (For EVEN Roll No.)

## **SUBJECT – ENGLISH**

Q1. Write a letter to the Principal for fee concession.

Q2. Write a letter to your friend telling her about your new school experience.

Q3. Write an essay on discipline.

### **Q4. Underline the Subject and Predicate**

1. The sun rises in the east.
2. The birds are flying in the sky.
3. They love to play chess.
4. Riya and Siya are best friends.

### **Q5. Fill in the blanks with suitable Predicate**

1. She \_\_\_\_\_.
2. My mother \_\_\_\_\_.

### **Q6. Fill in the blanks with suitable Subject**

1. \_\_\_\_\_ are going to party.
2. \_\_\_\_\_ is a big star.

### **Q7. Identify the kinds of sentences**

1. Please give me a glass of water.
2. What a beautiful picture!

### **Q8. Circle the Common Noun and underline the Proper Noun**

1. I have a red car.
2. John and Mary went to the supermarket.
3. We have a pizza for lunch.

### **Q9. Write 'C' for Countable and 'U' for Uncountable Noun**

1. Sugar
2. Oil
3. Pen
4. Book

### **Q10. Identify the kinds of nouns**

1. Mr Sharma is our Maths teacher.
2. The flock scattered to escape Brittany .

## Literature

11. What different colours are mentioned in the chapter?
12. Which colour do you like the most and why?
13. What activities do Badal and Moti do together?
14. What values do you learn from the chapter “Badal and Moti”?
15. What did the children do in the garden?
16. How can we keep the garden clean and beautiful?
17. What qualities of best friends are shown in this chapter?
18. Who were the best friends in this story?

### Q19. Frame Sentences

- Accompanied
- Friends
- Tug
- Bounce
- Swing
- Wise
- Colours

**Q20. Write some lines about where you went in your summer vacation.**

### SUBJECT ENRICHMENT ACTIVITY

#### Topic: Kinds of Nouns

Activity: Draw a big Tree on A4 Sheet or On Half Chart.

Write “Nouns” on the Trunk of the Tree. Make 5 Branches Named:

- (a) Proper Noun
- (b) Common Noun
- (c) Collective Noun
- (d) Material Noun
- (e) Abstract Noun

Paste pictures and write examples on each branch of the tree. Decorate the chart neatly with colours

# Mathematics

## Questions

1. Find the largest number name that is hidden in the series given below.

**Note:** The letters in the number name should appear together as continuous letters

FORHLKJLTEMELVENDSKLFOURSDGSTWENTYSJLSIXTKSEVENL

- a) 60                                      b) 6                                      c) 20                                      d) 70

2. Roy's favourite number has:

- 3 letters in its name
- The number of vowels is double the number of consonants in its name

What is Roy's favourite number?

- a) 2                                      b) 6                                      c) 10                                      d) 1

3. If each of the given boxes follows the same theme, what will come in place of “?”

--	--	--	--

- a) NINE3                                      b) THREE9                                      c) THREE3                                      d) 9THREE

4. If each of the following terms follows the same theme, what will come in place of “?”


- a)
- b)
- c)
- d)

5. If each of the following terms follows the same theme, what will come in place of “?”


- a)
- b)
- c)
- d)

6. Find the odd one out.



7. Which of the following number names given in the options will come second if arranged in dictionary order of their names?

a) 5

b) 6

c) 8

d) 9

8. Each shape has a letter in it. Spelling (or Name) of which of the following numbers, given in the options can be formed by combining the letters in the circles only?



a) 1

b) 5

c) 9

d) 6

9. Spelling of which of the following numbers given in the options is present in the group of letters given below?

**Note:** The letters of the name should appear in the same order as in the word

**TWLVETOWELEVENSVENTHREEIFEIHGT**

a) 2

b) 7

c) 3

d) 8

10. Which of the following numbers CANNOT be spelt using the letters present in the image given below?

**Note:** If a letter appears in the image, it can be repeatedly used any number of times to spell the number name



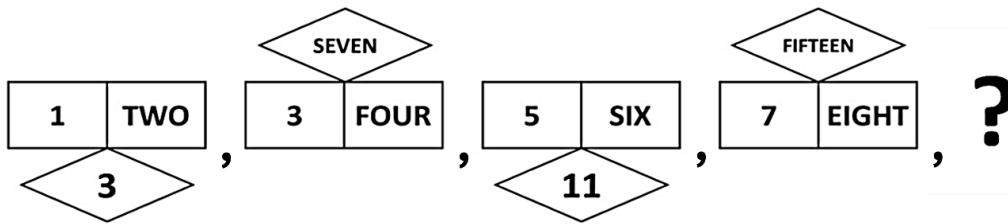
a) 50

b) 30

c) 85

d) 11

11. What will come in place of "?" in the given series?



- a) b) c) d)

12. If you were to write the numbers given below in words, spelling of which of them would have exactly one vowel in it?

- a) 1                                      b) 2                                      c) 5                                      d) 9

13. X is a single digit number. If X has exactly five letters in its spelling, how many different values can X possibly have?

**Note:** If a letter is repeated in the spelling of X, it has to be counted as many times as it appears in the spelling. For example, the word "NINE" has 4 letters and not 3 letters

- a) 1                                      b) 2                                      c) 3                                      d) 4



### The Thinking Spot

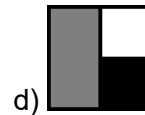
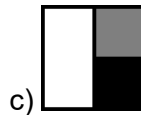
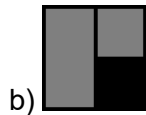
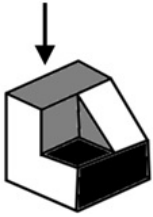
Raj, Aryan, and Rahul went to a movie on different days.  
 Raj did not go to the movie on Monday, Wednesday, or Thursday.  
 Aryan went to the movie on Friday, and Rahul went to the movie on Sunday.  
 Which of the following days could Raj have gone to the movie?

- (a) Thursday  
 (b) Tuesday  
 (c) Saturday  
 (d) Either Tuesday or Saturday

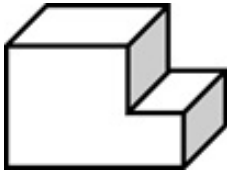


# Chapter 2: Toy Joy

1. Which of the following options represents the top view of the object given below?



2. Count the number of surfaces (faces) in the given solid.



a) 6

b) 7

c) 8

d) 9

3. The given shapes are to be placed in the buckets. Shapes with a number of edges greater than 5 are kept in a yellow bucket while the others are kept in the white bucket. Out of the shapes in the yellow bucket, how many have EXACTLY 6 edges?



a) 2

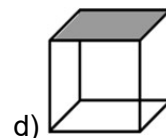
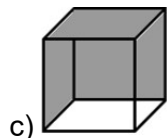
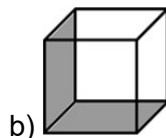
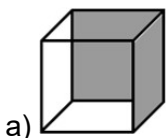
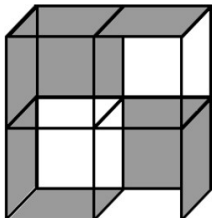
b) 3

c) 4

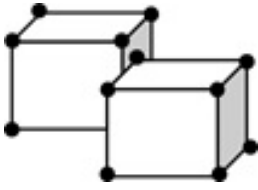
d) 5

4. Given below is a large box consisting of four smaller transparent boxes with some sides coloured. Which of the boxes shown in the options is not a part of the larger box in the question image?

**Note:** Rotation of option images is not allowed

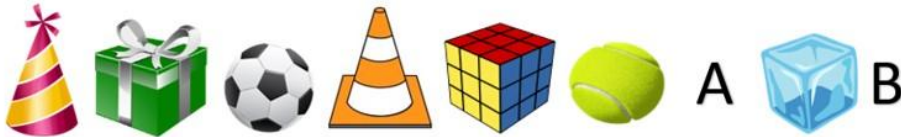


5. If there is a dot on each corner of the cubes below, then how many dots are hidden?



- a) 3                      b) 4                      c) 5                      d) 6

6. What will come in place of 'A' and 'B'?



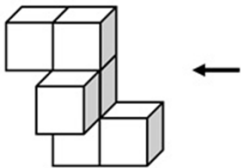
- a) A = B =
- b) A = B =
- c) A = B =
- d) A = B =

7. Find the odd one out.



8. If the given solid is viewed from the direction of the arrow, what will it look like?

**Note:** You cannot rotate the question or option images



- a)
- b)
- c)
- d)

